

Extensions Unit, Station 4, Round 1, Task 3



Finding Perimeter

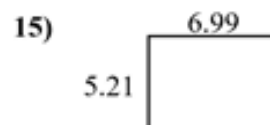
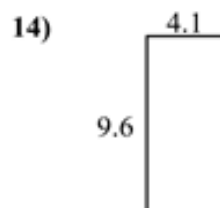
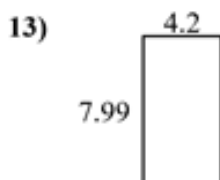
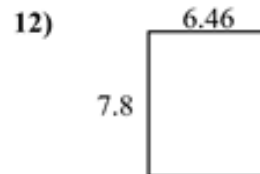
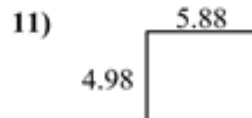

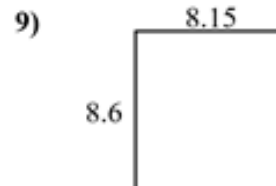
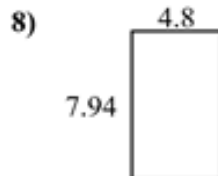
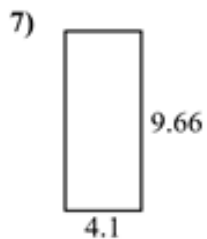
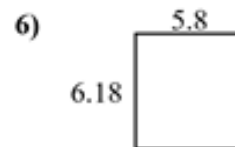
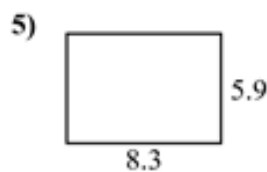
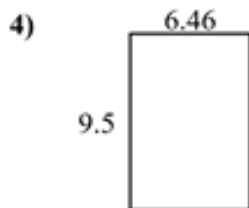
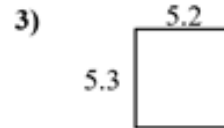
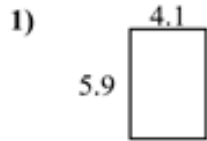
with Decimals

Name: _____

Find the perimeter
to scale.

of each figure. Each figure is in centimeters (cm). Not

Answers



1. _____
2. _____
3. _____
4. _____
5. _____
6. _____
7. _____
8. _____
9. _____
10. _____
11. _____
12. _____
13. _____
14. _____
15. _____